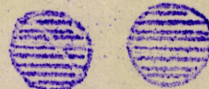

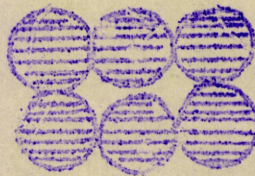




(1) Jeane quantas frutas tem? (Base três)

(2) E Paulo quantas tem? (Base três)

(3) Quantas frutas tem juntos os dois? (Base três)



(4) Quantos



?

Base seis, base três

(5) Quantos



?

Base seis, base três

(6) Quantas formas ao todo? Base seis, base três