


INSTITUTO DE EDUCAÇÃO GEN. FLORES DA CUNHA - LAB. de MATEMÁTICA  
 Agrupa os elementos de acordo com as bases.  
 Coloca o numeral na grade.


Base 2



			x

Base 2

Base 5




			x

Base 5

			x


			x

Escreve os numerais, correspondentes, nas grades.



Base 10

			x



Base 10

			x

Representa conjuntos que possuam os números de elementos representados nos quadros.

Base 2

			x

Base 5

Base 10

			x

			x