


PINTAR AS PARTES DE CADA FIGURA DE ACÓRDO COM O QUADRO|:


- fol. 6 -




A



B

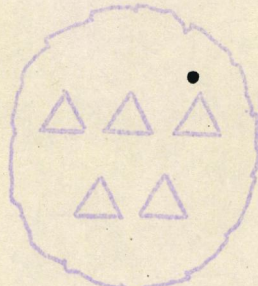


C

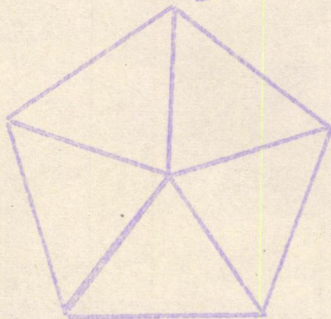


D


A	(2,5)
B	(3,7)
C	(1,4)
D	(3,4)
E	(1,5)
F	(3,5)
G	(4,4)
H	(3,6)
I	(5,5)




E




F



G

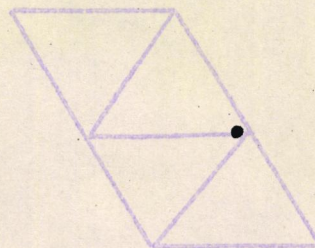






H




I

PINTE METADE DE CADA FIGURA E ASSOCIA O PAR ORDENADO CORRESPONDENTE:






ASSOCIE A CADA FIGURA O PAR ORDENADO CORRESPONDENTE:



PINTE A TERÇA PARTE DE CADA FIGURA

E ASSOCIE O PAR ORDENADO CORRESPONDENTE:



PINTE DE ACÓRDO COM A FRAÇÃO:


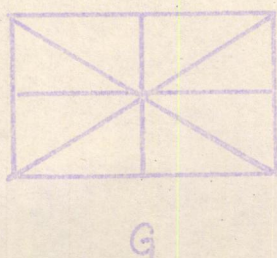
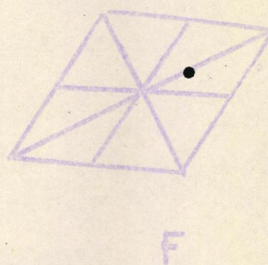
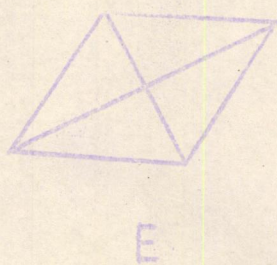

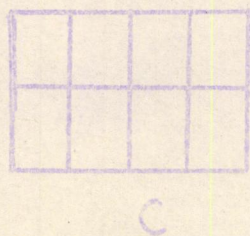




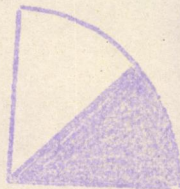




FIGURA	FRAÇÃO
A	$\frac{1}{4}$
B	$\frac{2}{8}$
C	$\frac{2}{8}$
D	$\frac{1}{4}$
E	$\frac{1}{4}$
F	$\frac{2}{8}$
G	$\frac{2}{8}$
H	$\frac{1}{4}$

Qual é maior: $\frac{1}{4}$ ou $\frac{2}{8}$?

Associar as figuras às frações correspondentes:



$$\frac{1}{2}$$

$$\frac{1}{3}$$

$$\frac{1}{4}$$

Complete o quadro de acôrdo com as figuras:



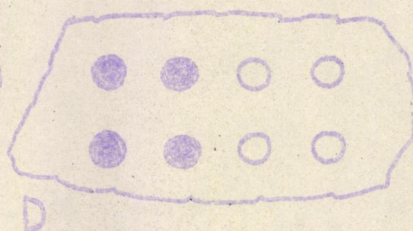





FIGURA	PARTES PINTADAS	TOTAL DAS PARTES	FRAÇÃO
A	1	3	$\frac{1}{3}$
B			
C			
D			
E			
F			

Assinale as figuras em que tôdas as partes são do mesmo tamanho.

Pinte uma das partes de cada figura assinaladas.

