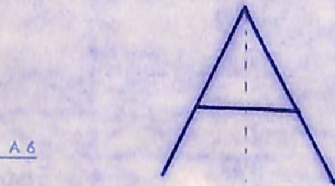


Exercícios sobre: Simetrias Centrais

Composição de Transformações

1) Traça as imagens das seguintes figuras, pelas Simetrias Centrais, indicadas em cada caso.

a) S_B

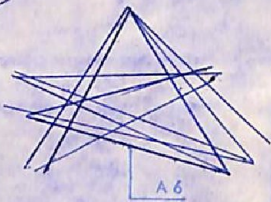


B

b) S_C



b) S_C



C

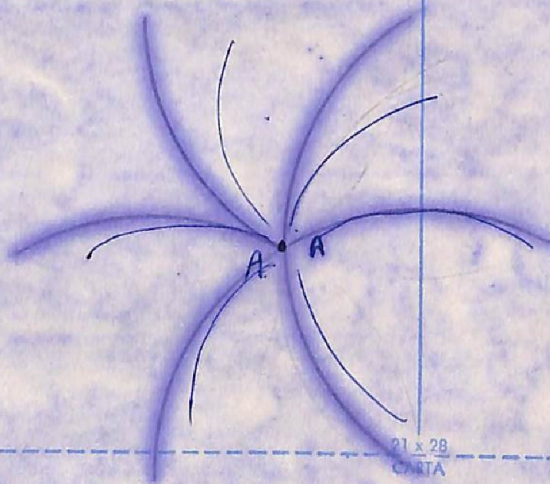
MEMORANDO

c) S_D

D



d) S_A



A

A

21 x 28 CARTA

3

2

1

0