


SUGESTÕES DE ATIVIDADES GRÁFICAS

As sugestões foram retiradas do livro
 C. Moderno de Mat. para o ensino de 1.º G.
 Lucila Sanchez e Irineuza Liberman.

1. Complete o quadro de acordo com as figuras

Fig.	Partes pintadas	Total das partes
A		
B		
C		

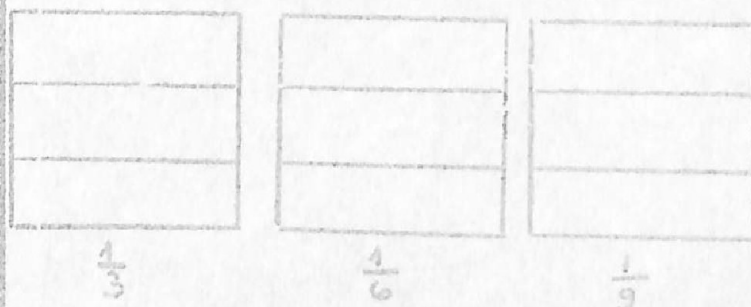


2. Para cada fração pinta duas figuras.




Fig.	Fração
A	$\frac{3}{4}$
B	$\frac{2}{5}$
C	$\frac{2}{6}$


3. Pinta de acordo com a fração.



4. De duas frações correspondentes a parte pintada em cada figura



5. Assinala a resposta certa que parte das figuras



a) quadrados?

$\frac{1}{2}$ $\frac{1}{4}$ $\frac{1}{2}$

b) verde?

$\frac{1}{4}$ $\frac{2}{10}$ $\frac{2}{5}$

c) vermelha?

$\frac{1}{3}$ $\frac{2}{8}$ $\frac{1}{2}$

6. Pinta de acordo com a fração e complete com >, < ou =




$\frac{1}{3}$ — $\frac{1}{5}$




$\frac{1}{5}$ — $\frac{1}{2}$



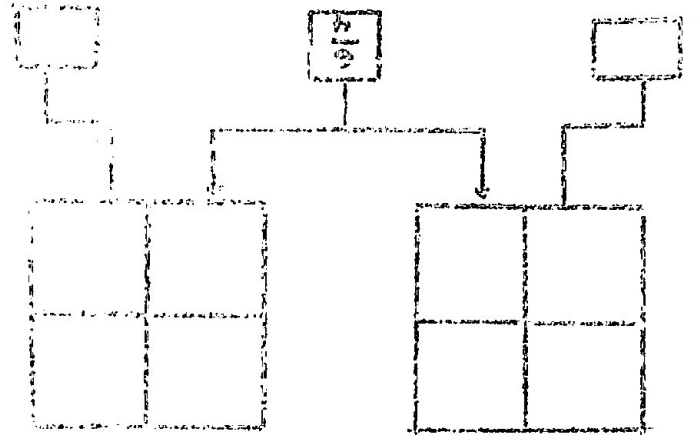
$$\frac{27}{1} = \frac{27}{1}$$



$$\frac{10}{5} = \frac{2}{1}$$



18. Pinta de acordo com o modelo.



19. Pinta de acordo com o modelo e coloca as outras alíquotas.


$$\frac{10}{5}$$




$$\frac{12}{3}$$




$$\frac{0}{1}$$



20. Pinta de acordo com o modelo e coloca as outras alíquotas.

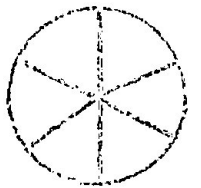


$$\frac{1}{2}$$

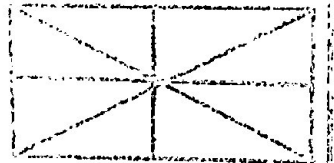


21. Pinta de acordo com o modelo e coloca as outras alíquotas.

9. Responde:




$$\frac{1}{2} + \frac{1}{3} = \frac{5}{6}$$



$$\frac{2}{5} + \frac{3}{5} = \frac{5}{5} = 1$$

$$\frac{1}{2} + \frac{1}{3} = \frac{5}{6}$$



2. Pinta a figura com duas cores de modo a sugerir...

3. Complete as sentenças.

$$\frac{1}{2} + \frac{1}{2} = 1$$

$$\frac{1}{3} + \frac{2}{3} = 1$$



$$\frac{1}{4} + \frac{3}{4} = 1$$

$$\frac{1}{5} + \frac{4}{5} = 1$$

1. Elabore frases no tempo verbal indicado, com o verbo sublinhado de cada verbo.

Funções - Tipos de Verbos

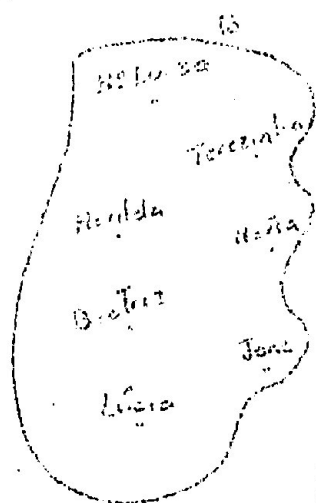
R₁ ... tem por parente ...



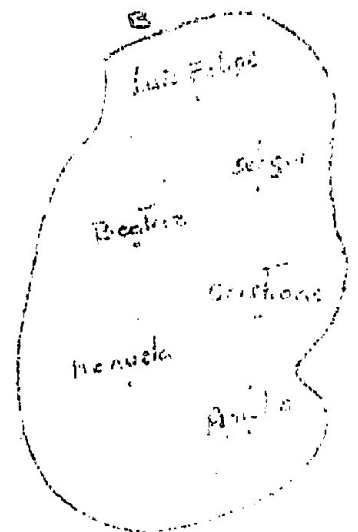

R₂ ... tem por companheiro ...



R₃ ... tem por mãe ...



R₄ ... é irmão de ...



	conj. Particípio	Dominio	Tipos de partor	Função	conj. chegada	Imagem	Tipos de partor	Tipos de função
R ₁	A	A	Simplex		B	B	Simplex and Particípio	
R ₂	A	A	Complexo		B	B	Complexo	
R ₃	A	A	Simplex		B	A, B	Simplex and Particípio	
R ₄	A	A, B	Simplex and Particípio					

